

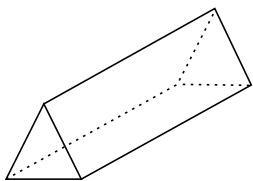


แบบฝึกหัด 6.2



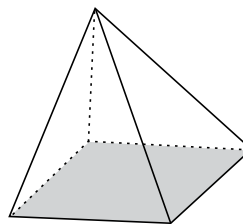
ภาพต่อไปนี้ เป็นภาพปริซึมหรือไม่ ถ้าเป็นให้ระบุชนิดของปริซึม พร้อมทั้งระบุหน้าตัดหรือฐาน และหน้าข้าง ถ้าไม่เป็นให้ระบุเหตุผล

1.



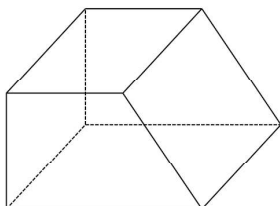
.....
.....
.....

2.



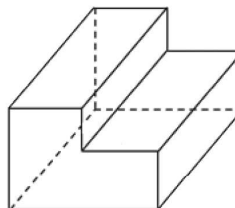
.....
.....
.....

3.



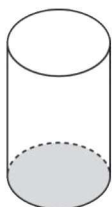
.....
.....
.....

4.



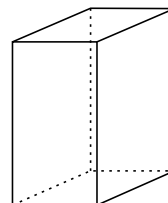
.....
.....
.....

5.



.....
.....
.....

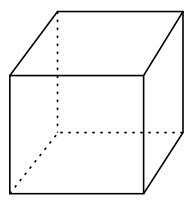
6.



.....
.....
.....

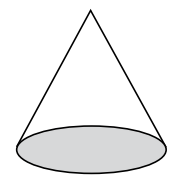


7.



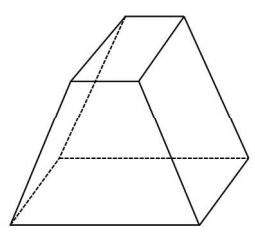
.....
.....
.....

8.



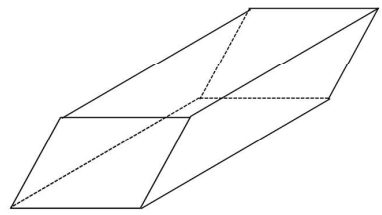
.....
.....
.....

9.



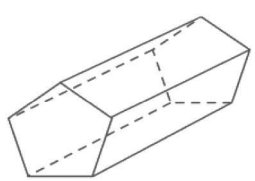
.....
.....
.....

10.



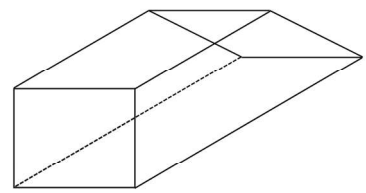
.....
.....
.....

11.



.....
.....
.....

12.



.....
.....
.....