
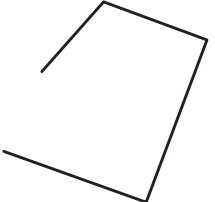


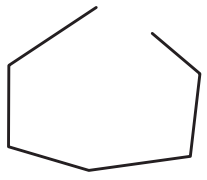


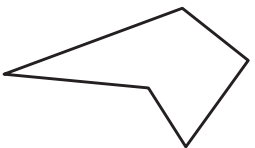
# แบบฝึกหัด 6.20

คำชี้แจง รูปที่กำหนดให้เป็นรูปหลายเหลี่ยมหรือไม่ เพราะเหตุใด

1)  \_\_\_\_\_  
\_\_\_\_\_  
\_\_\_\_\_


2)  \_\_\_\_\_  
\_\_\_\_\_  
\_\_\_\_\_

3)  \_\_\_\_\_  
\_\_\_\_\_  
\_\_\_\_\_

4)  \_\_\_\_\_  
\_\_\_\_\_  
\_\_\_\_\_

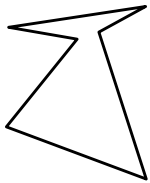
5)  \_\_\_\_\_  
\_\_\_\_\_  
\_\_\_\_\_

6)




.....  
.....  
.....

7)



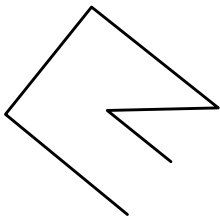
.....  
.....  
.....

8)



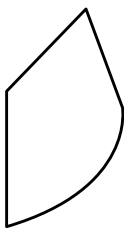
.....  
.....  
.....

9)



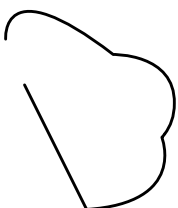
.....  
.....  
.....

10)



.....  
.....  
.....

11)



.....  
.....  
.....

คำชี้แจง ให้นักเรียนวาดรูปสี่เหลี่ยม รูปสี่เหลี่ยม และรูปยี่สิบเหลี่ยม บนกระดาษจุด

