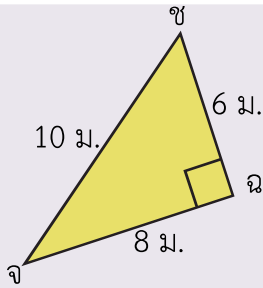




# แบบฝึกหัด 6.12

คำชี้แจง หาพื้นที่ของรูปสามเหลี่ยม

1.



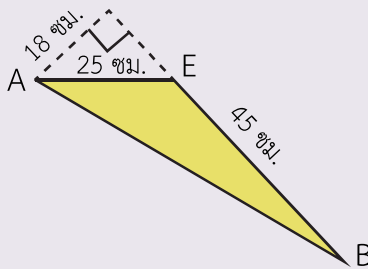
---

---

---

---

2.



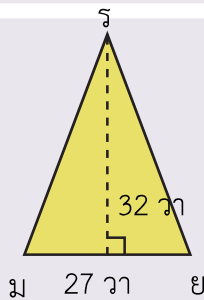
---

---

---

---

3.



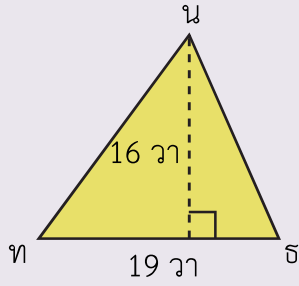
---

---

---

---

4.



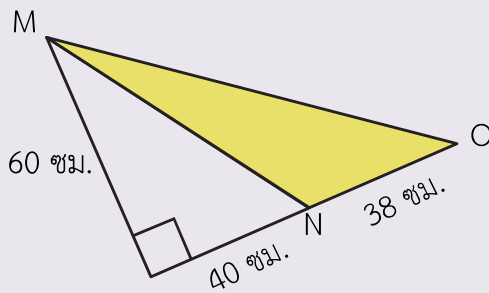
.....

.....

.....

.....

5.



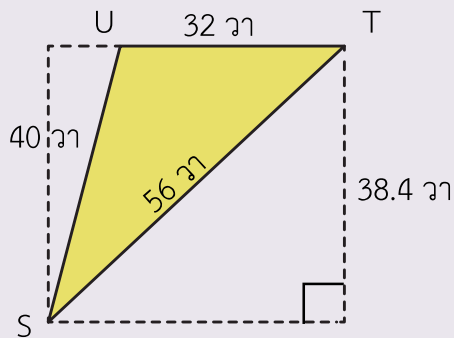
.....

.....

.....

.....

6.



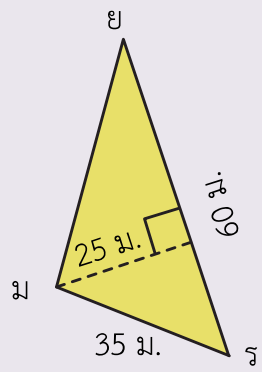
.....

.....

.....

.....

7.



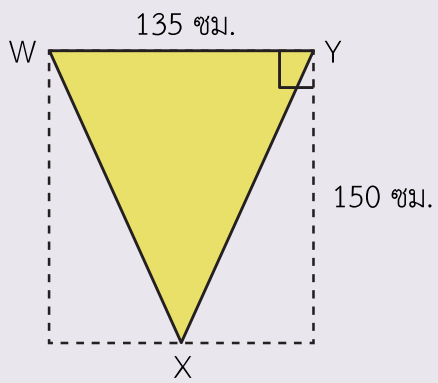
---

---

---

---

8.



---

---

---

---

