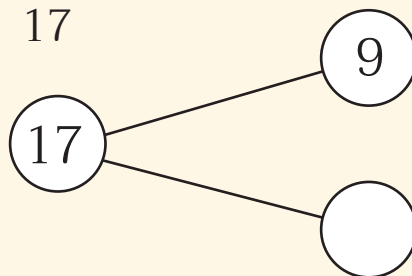




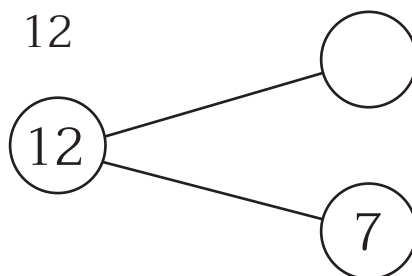
แบบฝึกหัด 2.40

1) เติมคำตอบ

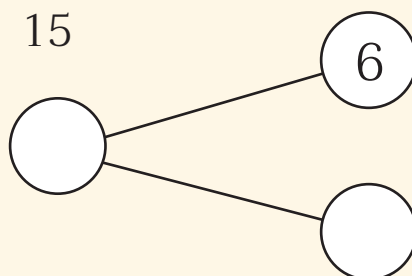
1) $9 + \dots = 17$



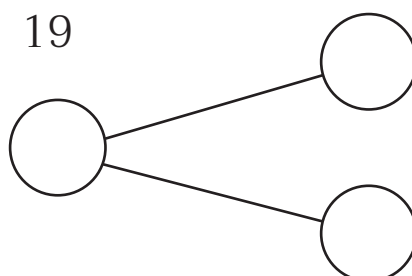
2) $\dots + 7 = 12$



3) $6 + \dots = 15$



4) $\dots + 12 = 19$





๒ เติมคำตอบ

1) $14 + \dots = 16$

2) $\dots + 10 = 13$

3) $13 + \dots = 14$

4) $\dots + 11 = 11$

5) $8 + \dots = 17$

6) $\dots + 13 = 18$

7) $11 + \dots = 19$

8) $\dots + 15 = 18$

9) $18 + \dots = 20$

10) $\dots + 13 = 16$