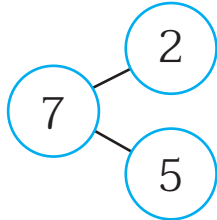


แบบฝึกหัด 2.20

1) เติมตัวเลขแสดงจำนวนใน

1)

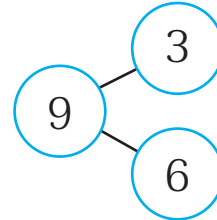


$$2 + 5 = 7$$

$$7 - 2 = \square$$

$$7 - 5 = \square$$

2)

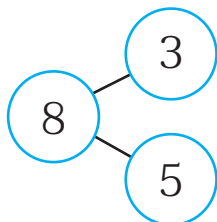


$$3 + 6 = 9$$

$$9 - 3 = \square$$

$$9 - 6 = \square$$

3)

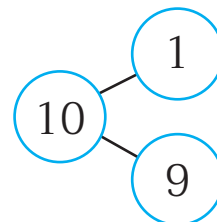


$$3 + 5 = 8$$

$$8 - 3 = \square$$

$$8 - 5 = \square$$

4)

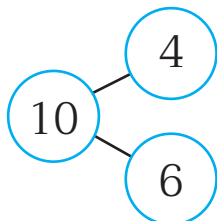


$$1 + 9 = 10$$

$$10 - 1 = \square$$

$$10 - 9 = \square$$

5)

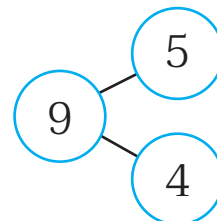


$$4 + 6 = 10$$

$$10 - 4 = \square$$

$$10 - 6 = \square$$

6)



$$5 + 4 = 9$$

$$9 - 5 = \square$$

$$9 - 4 = \square$$