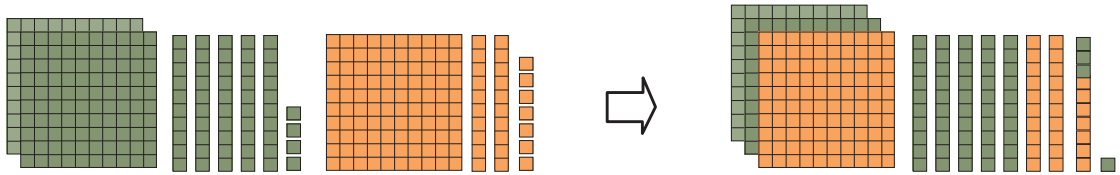


## แบบฝึกหัด 2.5

## 1) หาผลบวก

1)  $254 + 127 = \square$



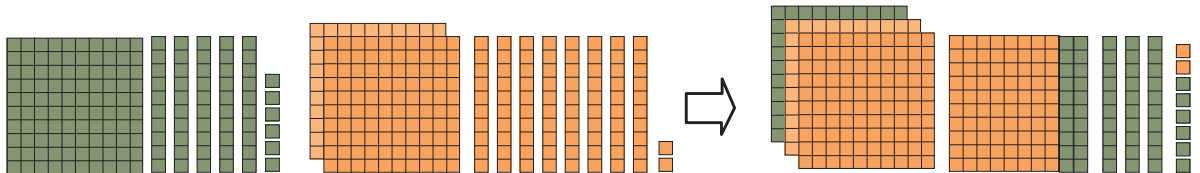
254

กับ

127

ตอบ

2)  $156 + 282 = \square$



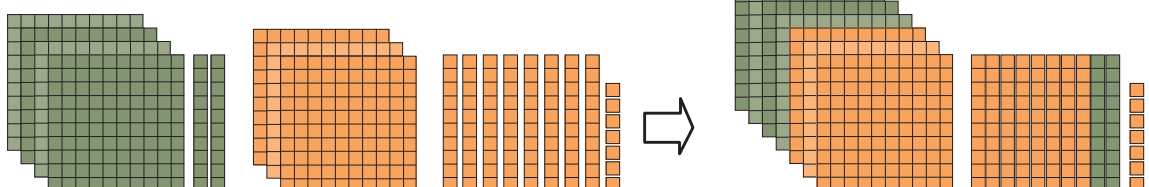
156

กับ

282

ตอบ

3)  $420 + 387 = \square$



420


กับ

387

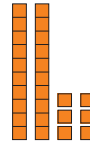
ตอบ

## 2) หาผลบวก

1)  $159 + 26 = \square$

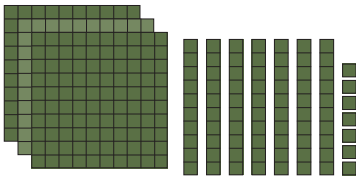


กับ

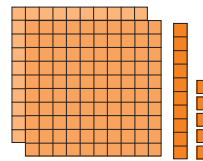


ดังนั้น  $159 + 26 = \dots\dots\dots$

2)  $377 + 215 = \square$

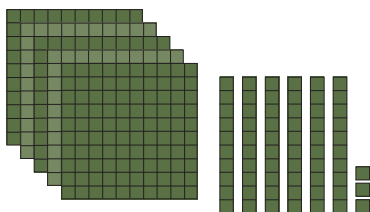


กับ

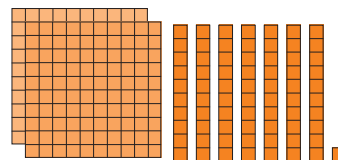


ดังนั้น  $377 + 215 = \dots\dots\dots$

3)  $563 + 271 = \square$



กับ



ดังนั้น  $563 + 271 = \dots\dots\dots$