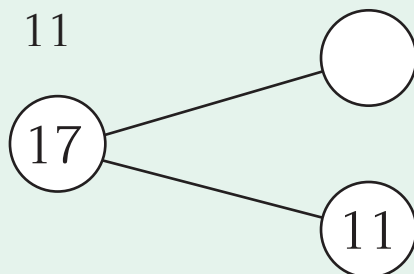




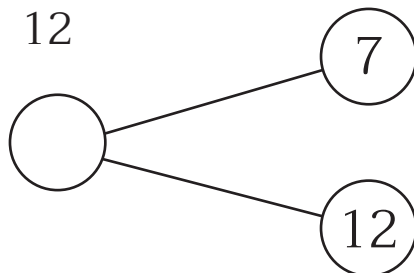
แบบฝึกหัด 2.41

1) เติมคำตอบลงในช่องว่างและวงกลม

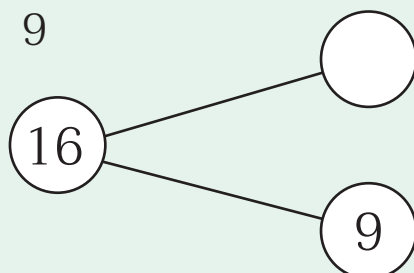
1) $17 - \dots\dots\dots = 11$



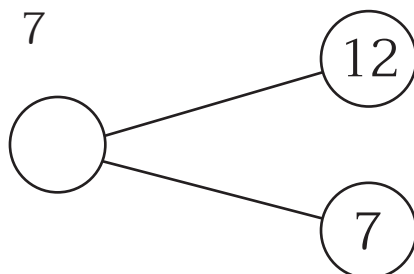
2) $\dots\dots\dots - 7 = 12$



3) $16 - \dots\dots\dots = 9$



4) $\dots\dots\dots - 12 = 7$





๒ เติมคำตอบ

$$1) \quad 17 - \dots = 13$$

$$2) \quad \dots - 10 = 8$$

$$3) \quad 13 - \dots = 5$$

$$4) \quad \dots - 11 = 6$$

$$5) \quad 18 - \dots = 9$$

$$6) \quad \dots - 12 = 8$$

$$7) \quad 20 - \dots = 14$$

$$8) \quad \dots - 17 = 1$$

$$9) \quad 19 - \dots = 19$$

$$10) \quad \dots - 8 = 8$$