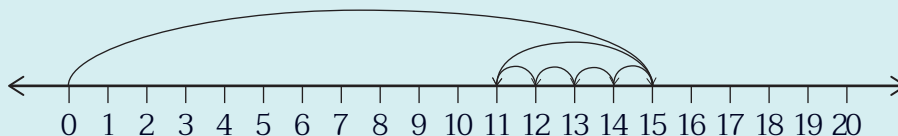




แบบฝึกหัด 2.34

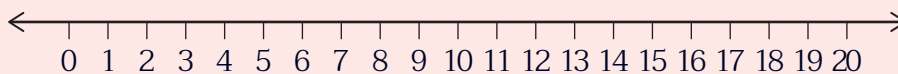
จงหาผลลบ

1 $15 - 4 = \square$



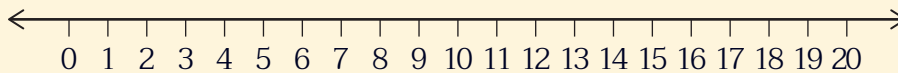
ดังนั้น $15 - 4 = \square$

2 $15 - 8 = \square$



ดังนั้น $15 - 8 = \square$


3 $17 - 5 = \square$



ดังนั้น $17 - 5 = \square$

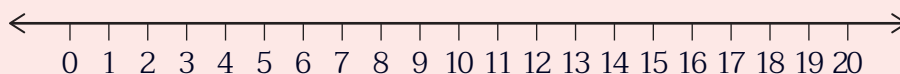


4 $17 - 9 = \square$



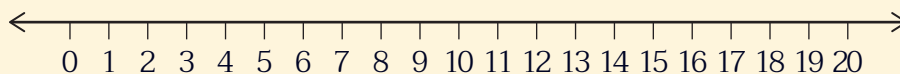
ดังนั้น $17 - 9 = \square$

5 $20 - 6 = \square$



ดังนั้น $20 - 6 = \square$

6 $20 - 9 = \square$



ดังนั้น $20 - 9 = \square$