



๒ เติมจำนวนใน

	$\boxed{1} + \boxed{1} = \boxed{2}$
--	-------------------------------------

	$\boxed{} + \boxed{} = \boxed{}$
--	---

	$\boxed{} + \boxed{} = \boxed{}$
--	---

	$\boxed{} + \boxed{} = \boxed{}$
--	---

	$\boxed{} + \boxed{} = \boxed{}$
--	---

	$\boxed{} + \boxed{} = \boxed{}$
--	---










	$\boxed{} + \boxed{} = \boxed{}$
--	---

	$\boxed{} + \boxed{} = \boxed{}$
--	---

	$\boxed{} + \boxed{} = \boxed{}$
--	---



3 เขียนประโยคสัญลักษณ์การบวกจากสถานการณ์ที่กำหนด

<p>1)</p> 	
<p>2)</p> 	
<p>3)</p> 	
<p>4)</p> 	
<p>5)</p> 	

$$\square + \square = \square$$

$$\square + \square = \square$$

$$\square + \square = \square$$

$$\square + \square = \square$$

$$\square + \square = \square$$