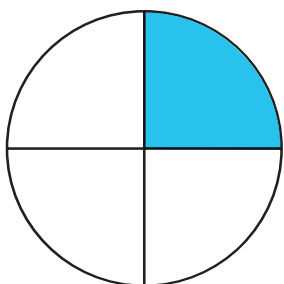


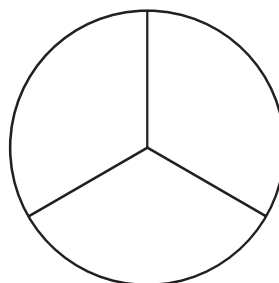


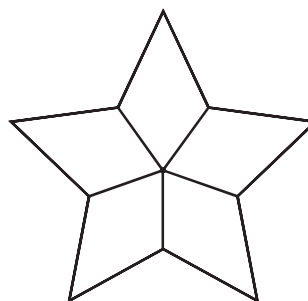
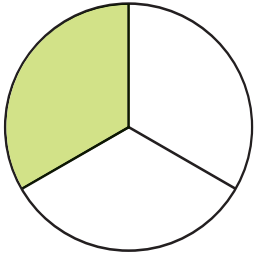
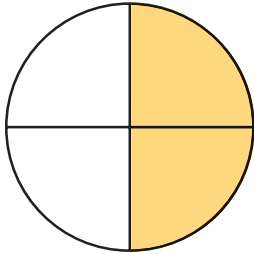
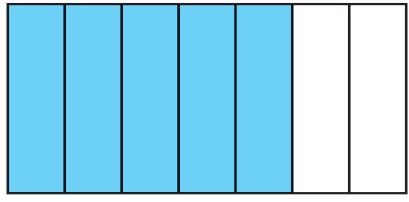
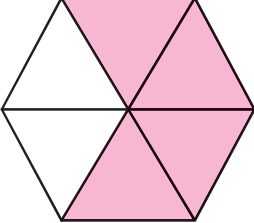
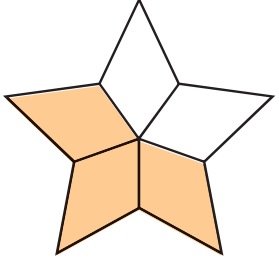
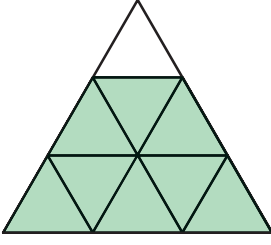


แบบฝึกหัด 5.3

1 ระบายสีแสดงเศษส่วนที่กำหนด

ตัวอย่าง $\frac{1}{4}$ 1) $\frac{2}{3}$ 2) $\frac{6}{9}$ 3) $\frac{2}{3}$ 4) $\frac{3}{6}$ 5) $\frac{4}{5}$ 

2 เขียนเศษส่วนแสดงจำนวนของส่วนที่ระบายสี พร้อมเขียนคำอ่าน

<p>ตัวอย่าง</p>  <p>$\frac{1}{3}$ เศษหนึ่งส่วนสาม</p>	<p>1)</p>  <p>.....</p>
<p>2)</p>  <p>.....</p>	<p>3)</p>  <p>.....</p>
<p>4)</p>  <p>.....</p>	<p>5)</p>  <p>.....</p>

